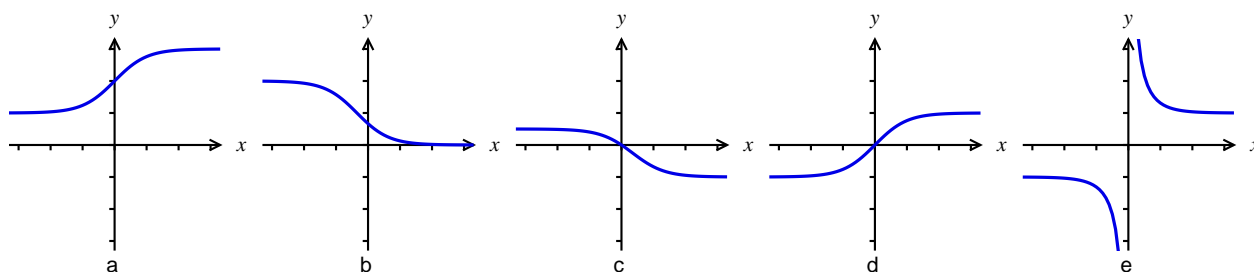


# College of Charleston Math Meet 2025 Written Test – Level 3

1. Find the minimum value of  $x^4 - 6x^2 - \frac{6}{x^2} + \frac{1}{x^4}$ .  
 (A)  $-11$  (B)  $-10$  (C)  $-6$   
 (D)  $5$  (E) none of these
2. Evaluate  $\lim_{x \rightarrow 0} \frac{\sec(2x) - 1}{\sec(3x) - 1}$ .  
 (A)  $0$  (B)  $\frac{2}{3}$  (C)  $\frac{3}{2}$   
 (D)  $\frac{4}{9}$  (E) none of these
3. One tangent line to  $y = f(x)$  is  $y = 3x - 2$ . Which of the following must be a tangent line to  $y = 4 + 5f(2x)$ ?  
 (A)  $y = 2x$  (B)  $y = 15x - 6$  (C)  $y = 15x - 10$   
 (D)  $y = 30x - 6$  (E) none of these
4. Which of the figures below could **not** be the graph of a function of the form

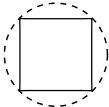
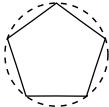
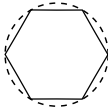
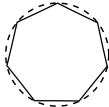
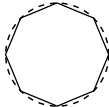
$$f(x) = \frac{he^x + e^{-x}}{e^x + ke^{-x}}$$

for some constants  $h$  and  $k$ ?



- (A) a (B) b (C) c (D) d (E) e
5. What is the largest prime value that  $f(x) = \frac{40x}{2 + x^2}$  can achieve?  
 (A)  $13$  (B)  $19$  (C)  $37$   
 (D)  $41$  (E) none of these
  6. Let  $f(x) = (x^2 - 1)^5$ . What's  $f^{(5)}(1)$ ?  
 (A)  $0$  (B)  $1$  (C)  $32$   
 (D)  $120$  (E) None of these

7. If we reflect the line  $y = x$  through the line  $y = 3x$ , what do we get?  
 (A)  $y = 5x$  (B)  $y = -7x$  (C)  $y = 8x$   
 (D)  $y = 9x$  (E) None of these
8. Which of the functions  $\sin(x)$ ,  $\cos(x)$ ,  $\tan(x)$ ,  $\sec(x)$  is largest on the interval  $\left[\frac{7\pi}{15}, \frac{\pi}{2}\right)$ ?  
 (A)  $\sin(x)$   
 (B)  $\cos(x)$   
 (C)  $\tan(x)$   
 (D)  $\sec(x)$   
 (E) which one is largest varies over the interval
9. For an integer  $n \geq 3$ , a regular  $n$ -gon is inscribed in a unit circle. What is the area of the  $n$ -gon?  
 (A)  $n^2 \sin\left(\frac{\pi}{n}\right)$  (B)  $n \sin\left(\frac{\pi}{n}\right)$  (C)  $n \sin\left(\frac{\pi}{2n}\right)$   
 (D)  $\frac{n}{2} \sin\left(\frac{2\pi}{n}\right)$  (E) none of these
10. Circle  $C_1$  has center  $P_1$  and radius 30. Circle  $C_2$  has center  $P_2$  and radius 25. The circles intersect at two points  $A$  and  $B$ . Angle  $\angle AP_1B$  is half the size of  $\angle AP_2B$ . What is the area of triangle  $\triangle AP_1B$ ?  
 (A) 288 (B) 375 (C) 432  
 (D) 450 (E) None of these
11. How many nonconstant linear functions  $f(x) = ax + b$  satisfy  $f \circ f \circ f = f$ ?  
 (A) none do (B) one (C) two  
 (D) three (E) infinitely many
12. Which of the following is equal to  $\log_{\sqrt{2}} 27$ ?  
 (A)  $\log_8 \sqrt{3}$  (B)  $\log_{\sqrt{3}} 8$  (C)  $\log_2 54$   
 (D)  $\log_{\sqrt[3]{2}} 9$  (E) None of these
13. Which of the following is a solution to  
 $\log_2(x+1) + \log_2(x^2+1) + \log_2(x^4+1) + \log_2(x^8+1) = 3 - \log_2(x-1)$   
 (A)  $\sqrt[16]{7}$  (B)  $\sqrt[8]{2}$  (C)  $\sqrt[8]{3}$   
 (D)  $\sqrt[16]{5}$  (E) None of these
14. What is the area of the largest rectangle that can be inscribed in the triangle formed by the coordinate axes and the line  $4x + 3y = 12$ ?  
 (A)  $3/2$  (B) 2 (C) 3  
 (D) 6 (E) none of these

15. Identical squares are arranged in a grid 2 squares high by  $n$  squares wide. If 2 out of these  $2n$  squares are chosen at random, let  $p$  be the probability that they form a rectangle. What is the smallest value of  $n$  for which  $p < 1/3$ ?
- (A) 3 (B) 4 (C) 5  
(D) 6 (E) none of these
16. If you throw a dart at square  $ABCD$ , and it lands at point  $P$ , what is the probability that  $\angle APB$  is acute? Round your answer to the nearest percentage.
- (A) 22% (B) 39% (C) 50% (D) 61% (E) 90%
17. Let  $f(x) = 2x^2 - 19x + 42$ . For how many values of  $x$  are both  $x$  and  $f(x)$  prime? (Note: 0, 1, and negative integers are *not* regarded as prime)
- (A) none (B) one (C) two  
(D) three (E) infinitely many
18. The polynomials  $x^2 - 2x + a$  and  $x^2 - 3x + b$  share a common root. What does that say about  $a$  and  $b$ ?
- (A)  $a = b = 0$  (B)  $2a = 3b$  (C)  $b = 2a$   
(D)  $(a - b)^2 = 2b - 3a$  (E) none of these
19. Solve  $\frac{(x+1)!(x-2)!}{x!(x-1)!} = \frac{50}{49}$ .
- (A)  $x = 49$  (B)  $x = 50$  (C)  $x = 51$   
(D)  $x = 99$  (E) none of these
20. Let  $P_n$  be a regular  $n$ -gon of sufficient size that it can be inscribed in a unit circle. In which of  $P_4, P_5, \dots, P_8$  can we draw the triangle with the largest area?
- (A)  $P_4$   (B)  $P_5$   (C)  $P_6$   (D)  $P_7$   (E)  $P_8$  
21. A staircase has twelve steps. You can take one or two steps at a time. In how many different ways can you go up the staircase?
- (A) 116 (B) 228 (C) 233  
(D) 427 (E) none of these
22. Mr. Jones (who commutes to work in the city by train) unexpectedly caught an earlier train than usual yesterday. Normally, his wife drives to the station, meets Mr. Jones, and they drive home together. Not having heard from her husband, Mrs. Jones left home for the station at her usual time yesterday. When he arrived at the station, Mr. Jones set out on foot toward home, met his wife on the way, and they arrived home 12 minutes earlier than they would have if he had waited at the station for his wife's arrival. Due to heavy traffic at rush hour, the car is only able to maintain an average speed that is 5 times the rate at which Mr. Jones is able to walk. Mr. and Mrs. Jones arrived home at exactly six o'clock. At what time would he have reached home if he had had time to call his wife before boarding the train so that she could have met him at the station as his train arrived? The correct answer is closest to
- (A) 5:18 (B) 5:24 (C) 5:30 (D) 5:36 (E) 5:42

23. The numerator of a fraction is  $a6bc$  and the denominator of this fraction is  $de3fg$ , where  $a, b, c, d, e, f, g$ , are unique digits. The numerator and the denominator consist of all of the digits 1, 2, 3, 4, 5, 6, 7, 8, and 9. If the value of the fraction is one-half, what must be the value of digit  $e$  ?
- (A) 5 (B) 7 (C) 8  
(D) 9 (E) none of these
24. What is the smallest positive integer  $m$  for which there is an integer  $n$  such that  $2010m + 2012n = 2$ ?
- (A) 503 (B) 1005 (C) 2010  
(D) 2011 (E) none of these
25. A professor distributes 20 sample mathematics problems and says there will be ten problems on the test from these twenty. What is the minimum number of these sample problems a student must know how to do in order to guarantee that they will pass the test with at least a grade of 60%?
- (A) twenty questions (B) eighteen questions (C) sixteen questions  
(D) fourteen questions (E) none of the above

## 2025 Answers / Level 3 Test

- |      |       |       |
|------|-------|-------|
| 1. A | 10. C | 19. D |
| 2. D | 11. E | 20. C |
| 3. D | 12. D | 21. C |
| 4. D | 13. C | 22. D |
| 5. A | 14. C | 23. A |
| 6. E | 15. C | 24. B |
| 7. B | 16. D | 25. C |
| 8. D | 17. C |       |
| 9. D | 18. D |       |